

Quiz 4e

Name:

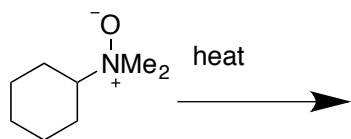
Signature:

Recitation Instructor:

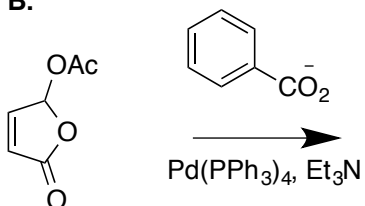
Start 5 minutes in, 30 minutes total... as always Good luck!

1. Predict the products of the following reactions (4 points each)

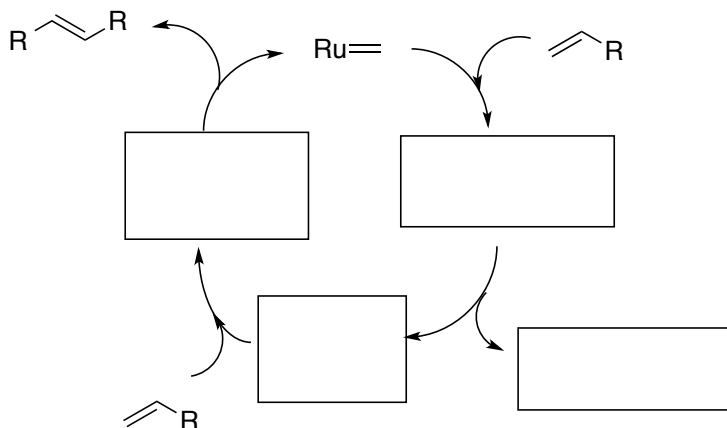
A.



B.



2. Show the intermediates and compounds generated in the following cross-metathesis (6 points).



3. Show a synthesis for the following (6 points)

